

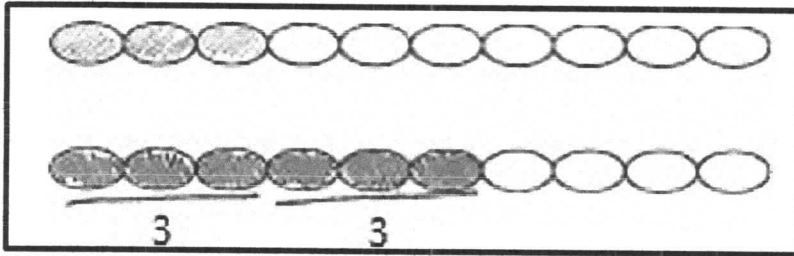
Name _____

Date _____

On the first chain, color the first 3 beads blue.

On the next chain, color more than 3 beads red.

How many beads did you color red? Write the number in the box.



6

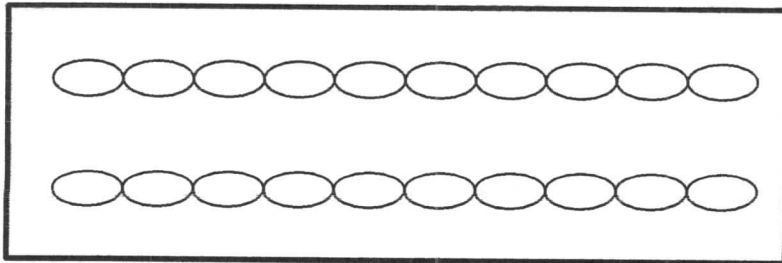
Three and three makes six!

6 red beads is more than 3.

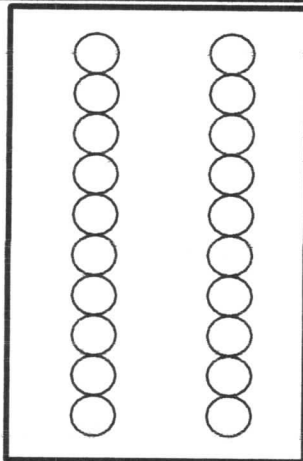
On the first chain, color the first 5 beads green.

On the next chain, color fewer than 5 beads yellow.

How many beads did you color yellow? Write the number in the box.



_____ yellow beads is fewer than 5.



Color 2 beads brown in the first column.

Color more than 2 beads blue in the second column.

How many beads did you color in the second column?
Write the number in the box.

_____ blue beads is more than 2.